




Budget at Home – Money Problems

Student Led Practice Sheet

1. Groceries


You buy the following items:



1. Show how much change you would get from:
 - a. £20
 - b. £10

2. How much more money would you need if you had £5?

2. Homeware



Show how many mugs you could buy and how much change you would get if you used these notes:

a. £20

b. £10

c. £5



3. Decorating

DIY Dave : Invoice

Item	Cost per item	Quantity	Total Cost
Tin of paint	£ _____	_____	£ _____
Skirting board	£ _____	_____	£ _____
Interior door	£ _____	_____	£ _____
Plug socket	£ _____	_____	£ _____
TOTAL			£ _____

Complete the invoice.

Dave charges £ _____ an hour for labour.

This job took him _____ hours.

What is the **new** total for the job, **including** material costs?


4. Ironing

Irene's Ironing

Service

£ _____ per shirt

£ _____ per pair of pants



1. Show how much Irene will charge to iron:

- _____ shirts
- _____ shirts and 3 pairs of pants
- _____ pairs of pants and 10 shirts

2. If Irene received £ _____ just for ironing pants, how many pairs did she iron?



5. Toiletries

Dustersrug★	
Shower gel	£ _____
Deodorant	£ _____
Handwash	£ _____
Soap	£ _____
Moisturiser	£ _____

Calculate the total cost and the change you would get from a £5 note if you bought:

- 1. Moisturiser and deodorant
- 2. Shower gel and soap
- 3. Handwash and two deodorants